



**A Day in the Life of the Hudson River (Snapshot Day)
Educator Packet
October 8, 2009**

<http://www.ldeo.columbia.edu/edu/k12/snapshotday/>

The Packet is designed for educators & teachers with information on a range of data gathering activities that are a part of A Day in the Life of the Hudson River. Any combination of these activities can be completed as part of the day's events. Additional activities are available on the Day in the Life website. Student data recording sheets are available on the website. Please be sure to submit your results to Margie Turrin (845-365-8179 (fax) or e-mail mkt@ldeo.columbia.edu) within 24-48 hours of collection! Questions? 845-365-8494.

PLEASE BE SURE TO RECORD TIME & UNITS OF MEASURE FOR EACH SAMPLING ITEM SO THAT COMPARISONS CAN BE MADE THROUGHOUT THE RIVER

ACTIVITY	PAGE
1. Site Background Information	Page 1
2. Tides & Currents	Page 2 & 3
3. Weather & Wind	Page 4
4. Beaufort Chart (wind)	Page 5-6
4. The Sampling Site Environment	Page 7-8
5. Site Sketch	Page 8
6. Other Physical Factors	Page 9
7. Chlorophyll Sampling	Page 10
8. Sediment Sampling	Page 11 -12
9. Chemical Measures	Page 13-14
10. Fish & Macroinvertebrates	Page 15-16
11. Hudson River Fish Checklist	Page 17-18
12. Other Observations - Shipping etc.	Page 19
13. Science Journaling/Almanac Entry	Page 19

Site Background Information.

- Coordinator/contact person _____
 Organization _____
 Street _____
 City _____ State _____ Zip _____
 phone _____ fax _____ email _____
- School/group name _____ District _____
 Name of teacher/group leader _____
 Street _____
 City _____ State _____ Zip _____
 phone _____ fax _____ email _____
 Number of participants _____ grade level/age _____
- Please tell us where you are sampling. Be as specific as possible. (Example: swimming beach, Kingston Point, City of Kingston, Ulster County.)

4. Using the map included with your packet, give your location along the Hudson estuary in river miles. (The Battery at the southern tip of Manhattan is River Mile 0; the Federal Dam at Troy is River Mile 153.)

River mile _____

If you have a way to determine the latitude and longitude of your site, enter that data here.

GPS Latitude _____ Longitude _____

Snapshot Day Activity I - Tides and currents

TIDES: The tide is the up and down motion of the water, the rising & falling. At a beach you need two slender, strong sticks as tide markers. At the start, place one stick at the water's edge. Push it deep into the ground or pile rocks at its base to hold it in place. If the shore is bulkheaded, choose a distinct, immovable feature on or near the bulkhead as a marker of whether the water level is rising or falling. If there are waves, use your judgment in deciding where the water's edge/surface is.

Basic Measure: Using a watch, check your tide marker every 15 minutes. Record the water level as rising, falling, or unchanged. If the level has changed, place the second stick to mark the new position of the water's edge on a beach, or - if there's a bulkhead - choose a new water level marker.

Intermediate Measure: For a more exact measure use a dowel marked in 10cm increments to set in the sediment OR if measuring off a bulkhead use a tape measure. Measure from the dock to the water surface. Have the students record the water level once the marker is set (record in column 3). Then follow above procedures but record actual measures so that a total tidal change can be calculated over a total time available for the activity.

Extra Activity: If your students have time at this station they can calculate how quickly the tide is rising or falling by dividing the change in height by the time between recordings. Think of the basic definition of speed as distance traveled divided by the time of travel. To calculate subtract the time from prior reading from this reading time for the time 'of travel' (or time elapsed). Next calculate the change in height from your prior reading (for the distance traveled) by subtracting these two numbers. Now divide the change in height by the time elapsed. This is the rate (speed) of tidal change. (record in column 4)

TIDES			
Time	Rising, Falling, Unchanged	Height in cm (if recording)	Rate of Tidal Change (cm/min)

CURRENTS: Currents are the internal movement in the water sometimes described as a push and pull in the water. After recording the tide level, determine the direction of the current. Using a mid sized stick, or an orange, toss it as far as you can out into the river. Note which direction it moves. The current moving downriver towards the sea is called the ebb; the current moving upriver is the flood. Don't confuse the direction of waves with the direction of the current; waves and current are different things. On a windy day, choose a stick large enough that the wind can't easily push it against the current.

Basic Measure: Every 30 to 60 minutes toss a stick or an orange as far out into the water as you can. Record the direction of travel as North (towards Albany) or South (towards the Atlantic) in column 5. Next record incoming as Ebb, outgoing as Flood, or if there is no movement record it as Slack. Record this in the last column #6.

Intermediate Measure: For a more exact measure you can calculate the speed (distance traveled divided by time traveled) by using a tape and a stopwatch to measure how fast the current is moving. Toss the stick or orange in to the water at a marked starting point (use a student to align with the start). Stop your watch after 60 seconds on a stop watch and place a student at the end point. Now have your students measure the distance between the two student markers with a measuring tape. Record this in column 2. Calculate distance per second by dividing the total distance by 60 secs. Record in column 3.

Extra Activity: USE A CALCULATOR: If your students want to calculate the rate of travel in knots use the calculation above (the distance in cm for 60 seconds) to compute this. Let's think this through. 1 kt. = 6076 ft. per hr. But we have cm so we need to convert ft. to cm. 1 ft. = 30.48 cm. so multiple these two to compute cm/hr or 185196.5 cm/hr. Now divide by 60 for cm per minute (3086.6 cm/min.) now by 60 again for cm/sec. What you find is that 1 kt = 51.44 cm/sec. SO to compute Knots from cm/sec use the following equation:

kts = cm/sec divided by 51.4. Record this as knots in column 4.

Example: If the stick traveled 125 cms in 60 seconds divide $125/60 = 2.08$ cm sec. $/51.4 = .04$ kts.

CURRENT					
Time	Cm/60 secs	Cm/sec	Knots (cm/sec)/51.4	North/ South	Ebb/Flood/Still (E/F/S)

Is there anything about the river or shoreline here that may cause the current near shore to flow in a different direction than the current out in the middle of the Hudson (a protected embayment, a pier jutting out causing an unusual swirling)?

IF YOU NOTICE THAT THE CURRENT APPEARS TO BE DIFFERENT IN THE MAIN CHANNEL THAN IT IS IN THE SHORELINE AREA PLEASE RECORD THIS NOTATION USING "S" FOR SHORELINE AND "C" FOR CHANNEL. THE DATA FROM THE MAIN CHANNEL IS THE BEST DATA TO RECORD SO PLEASE BE ALERT TO DIFFERENCES THAT MIGHT EXIST.

Snapshot Day Activity II – Weather and Wind

Weather and wind are important pieces of physical data that help to provide context for the other data. Weather includes current conditions, conditions over the last few days that may have an impact on the data you collect today (such as rain, extremely hot or cold weather). Wind levels can increase choppiness in the water thus adding oxygen and increasing levels of O_2 saturation. Wind can also affect movement on the top of the water surface which may make assessing currents difficult.

1. Record weather conditions at the start of sampling. Record changes every hour if possible.

a. Time _____ Air temperature _____ °F _____ °C

b. Time _____ Air temperature _____ °F _____ °C

Cloud cover (check one) clear _____ partly cloudy _____ mostly cloudy _____ overcast _____

Any precipitation? What kind? How much?

If the weather changes over the time you are sampling, please note that here.

Briefly describe the weather for the last three days. Any rain, wind, or unusual temperatures?

2. Wind speed:

(PLEASE REFER TO BEAUFORT CHART ON PAGES 4-5)

Using the Beaufort chart record the FIRST COLUMN as Beaufort FORCE _____.

Optional additional information to record _____ kts. and/or _____ mph

Using an anemometer to record wind record _____. (Be sure to record as kts ,or mph (kts preferred)









Record wind direction as the direction the wind is coming (blowing) **from** _____






Water Choppy _____ Water Calm _____

STORMFAX® WEATHER ALMANAC

Beaufort Wind Scale

*Devised by British Rear-Admiral, Sir Francis Beaufort in 1805
based on observations of the effects of the wind*

Beaufort number (force)	Wind Speed		Wave height (feet)	WMO* description	Effects observed on the sea	Effects observed on land
	knots	mph				
0	under 1	under 1	-	Calm	Sea is like a mirror	
1	1 - 3	1 - 3	0.25	Light air	Ripples with appearance of scales; no foam crests	
2	4 - 6	4 - 7	0.5 - 1	Light breeze	Small wavelets; crests of glassy appearance, not breaking	
3	7 - 10	8 - 12	2 - 3	Gentle breeze	Large wavelets; crests begin to break; scattered whitecaps	
4	11-16	13-18	3½ - 5	Moderate breeze	Small waves, becoming longer; numerous whitecaps	
5	17-21	19-24	6 - 8	Fresh breeze	Moderate waves, taking longer form; many whitecaps; some spray	
6	22-27	25-31	9½-13	Strong breeze	Larger waves forming; whitecaps everywhere; more spray	
7	28-33	32-38	13½-19	Near gale	Sea heaps up; white foam from breaking waves begins to be blown in streaks	

8	34-40	39-46	18-25	Gale	Moderately high waves of greater length; edges of crests begin to break into spindrift; foam is blown in well-marked streaks	
9	41-47	47-54	23-32	Strong gale	High waves; sea begins to roll; dense streaks of foam; spray may begin to reduce visibility	
10	48-55	55-63	29-41	Storm	Very high waves with overhanging crests; sea takes white appearance as foam is blown in very dense streaks; rolling is heavy and visibility is reduced	
11	56-63	64-72	37-52	Violent storm	Exceptionally high waves; sea covered with white foam patches; visibility further reduced	
12	64 and over	73 and over	45 and over	Hurricane	Air filled with foam; sea completely white with driving spray; visibility greatly reduced	
* World Meteorological Organization						

Fujita Scale of [Tornado Intensity](#)

STORMFAX and the STORMFAX logos are registered trademarks in the United States and Canada



Please read our [Legal](#) Notice and our [Privacy](#) Statement.
Copyright ©1996-2006 STORMFAX, INC.



Snapshot Day Activity III - The Environment at the Sampling Site

In completing the physical survey of your sample site please include a 200 ft. segment extending up and downriver from your sampling site (your site bisects the segment). Sketch a map of your sampling site on the next page and answer the following questions. If available, use a digital camera to photograph your site.

1. Using the list below describe the land at your site. Is it forested? Open and grassy? A parking lot? Used by people for picnics, launching boats, fishing, swimming, or other activities?

Surrounding Land Use:

Estimated % urban/residential _____
 Estimated % Forested _____
 Estimated % Beach _____
 Estimated % Industrial/Commercial _____
 Estimated % Other (specify) _____

2. Describe the shoreline. Is it a beach? A marsh? Is it sandy, muddy, or rocky? Is it lined with bulkheading - wooden timbers or metal plates that hold the shore in place? Has riprap (a line of large rocks) been piled along the shore? Do any pipes discharge into the river here?

DESCRIBE & USE CHECK FORM:

SHORELINE APPEARANCE: CHECK ALL THAT APPLY			
Beach area <input type="checkbox"/>	Pier <input type="checkbox"/>	Shore with Bulkhead (wood timbers/metal plates) <input type="checkbox"/>	Shoreline RipRap (large rocks) <input type="checkbox"/>
Covered with vegetation <input type="checkbox"/>	Debris in the Area such as broken concrete, docking <input type="checkbox"/>	Piping entering the river - (size) (North or South or sampling site & estimate distance) <input type="checkbox"/>	

3. Describe the water area in which you are sampling. Water Depth? _____ (list units of measure)

4. River Bottom Type - Is the bottom sandy, muddy, weedy, or rocky

5. Plants provide fish habitat, filter out sediments and nutrients, and can assist with oxygen exchange in the water. Water chestnut REMOVES oxygen from under its beds while water celery adds oxygen to the water when it is photosynthesizing. Use the *Hudson River Field Guide to Plants of Freshwater Tidal Wetlands* to identify any plants you find growing in the water. List them here.

Are there plants growing in or on the water? _____ Do they cover more than half of the area you are sampling? _____ Less than half? _____

What percent of your entire sampling area is covered with plants in the water? _____

Check if present and list estimated percentage of the total plant population for each plant:

Tidal Shallows:

Water Milfoils _____ % vegetation _____ Water Chestnut _____ % vegetation _____
 Water Celery _____ % vegetation _____ Other _____ % vegetation _____

Tidal Marshes:

Arrow Arum _____ % vegetation _____

Arrowhead _____ % vegetation _____

Big Cordgrass _____ % vegetation _____

Broad leaved Cattail _____ % vegetation _____

Bur-reed _____ % vegetation _____

Golden Club _____ % vegetation _____

Jewelweed _____ % vegetation _____

Mud Wort _____ % vegetation _____

Narrow-leaved Cattail _____ % vegetation _____

Pickerelweed _____ % vegetation _____

Phragmites /Common Reed _____ % vegetation _____

Purple Loosestrife _____ % vegetation _____

Reed Grass _____ % vegetation _____

Saltwater Cordgrass _____ % vegetation _____

Spatterdock _____ % vegetation _____

Swamp Rose-Mallow _____ % vegetation _____

Sweet Flag _____ % vegetation _____

Wildrice _____ % vegetation _____

Yellow Flag _____ % vegetation _____

Yellow Pond Lily _____ % vegetation _____

OTHER _____ % Vegetation _____

Snapshot DayRecording Sheet IV - Sketch Map of the Sampling Site

Include a compass rose (N, S, E, W) and rough scale. Label landmarks or notable features. Indicate specific locations where you sampled.

Snapshot Day Activity V - Other Physical Factors

1. Water temperature

Water temperature is important for understand the amount of dissolved oxygen the water can hold, and for the fish communities that will use the area. Students will better understand Fahrenheit temperatures, but in science it is important to become familiar with Celsius, so if possible, record water temperature in BOTH degrees Celsius and degrees Fahrenheit. Have them look at the comparison between the two. If you don't have both °C and °F thermometers, students can convert between the two using the following formulas:

$$^{\circ}\text{C} = 0.556 \times (^{\circ}\text{F} - 32) \qquad ^{\circ}\text{F} = (1.8 \times ^{\circ}\text{C}) + 32$$

It is best to take the water temperature several times in succession and then average. Over the day, you might want to see if there's any change, especially in shallow water and backwater areas, which may show more variation through the day due to sunlight, tide or current changes. You will also need to take temperature readings as part of some chemical tests.

Time	Reading 1	Reading 2	Reading 3	Average
_____	°F _____	_____	_____	_____
	°C _____	_____	_____	_____
_____	°F _____	_____	_____	_____
	°C _____	_____	_____	_____
_____	°F _____	_____	_____	_____
	°C _____	_____	_____	_____
_____	°F _____	_____	_____	_____
	°C _____	_____	_____	_____

2. Turbidity

Turbidity is water clarity which is an important feature of an estuary. Different techniques for determining turbidity use different units of measurement. Be sure to enter data on the correct line for the technique you use. Repeat several times in succession and average the results.

	Time	Reading 1	Reading 2	Reading 3	Average
secchi disk _____	_____	_____	_____	_____	_____ feet or cm
short site tube _____	_____	_____	_____	_____	_____ JTUs
long sight tube _____	_____	_____	_____	_____	_____ cm/meters
turbidimeter _____	_____	_____	_____	_____	_____ NTUs

Snapshot Day Activity IV – Chlorophyll Sampling

Chlorophyll

We were just looking at turbidity. In the Hudson River turbidity is made up of small bits of plankton, pieces of detritus or decomposing plant and animal matter, and suspended bits of sediment. The pigment Chlorophyll is what allows plants (and algae) to convert water and carbon dioxide to organic compounds in the presence of light, a process called photosynthesis. There are several types of Chlorophyll to assist plants to capture light at different wavelengths, but all plant cells have chlorophyll “a”. This activity will allow us to measure the amount of Chlorophyll “a” in your area of the river.

PLEASE FOLLOW THE PROTOTOL SHEET ON THE NEXT PAGE

120 ccs of river water will be collected and filtered through a fine mesh filter to separate the detritus, sediments and chlorophyll from the water. Once the water is filtered, examine the filter to evaluate the amount of material that is filtered. This will be an accumulation of not just chlorophyll but any suspended matter that was large enough to be filtered out. Using the color chart included with your kit select the color that best matches your filter and record on this data sheet.

The filter paper will be removed using tweezers – folded to protect the sample and placed in a vial and put on ice for collection and analysis at Lamont.

Label your vial with the following protocol:

Date – River Site –River Mile_ cc volume

Example

100809_PP_25_120cc

Record here -

TIME _____ # ON THE COLOR CHART MOST CLOSELY MATCHING SAMPLE _____

Snapshot Day Activity IIV – Sediment Sampling Background

SEDIMENT SAMPLING – push cores were distributed to a group of our participating stations for this process. If you don't have a corer you can skip this activity. Prior to sampling (i.e., before the bag gets wet), please use a permanent marker and label bag with the following information:

Date – River Site –River Mile

Example:

100809_PP_25 (for Piermont Pier)

You will take a core, examine and describe with your group using the form on the next page. Once the description is complete scoop the pieces into a Ziploc bag and return it to Lamont-Doherty Earth Observatory for X-Ray Fluorescence analysis (this will be picked up with your chlorophyll sample). The core will be homogenized for sampling so do not worry about squishing the sample.

Discussion items before examining your core:

- **The sediments in the core represent a period of time.** The material at the bottom is older than the material on the top. This is an important principle of geology called superposition.
- If material has been accumulating steadily, a sediment core will contain a record of the material transported by the river through time.
- One of the challenges faced by scientists who study sediment cores is determining the length of time represented by the sediments core. You can not tell how many years your core represents by simply looking at it. The amount of time represented by your core will range depending on the specific place and processes of the river in each area. In sections with high deposition it could represent a very short amount of time (days to a year), while in other areas it could represent a much longer time (10s to 100s of years or longer).
- What you can tell from looking at it is whether the color changes over the length of the core. Note the color of the sediments at the very top of the core. If the color is light brown, this is an indication that the surface sediments are oxidized (in contact with oxygen in the water. The oxidized section is the top usually represents the most recent deposition. Measure this and record it to determine how active the deposition in your area is. Usually, the sediments change to a darker color below the oxidized layer, this is called anoxic (no oxygen) or reducing. It usually means that these sediments have been out of contact with the oxygen in the river water and are older. Often this section will have a sulfur like smell. Measure and record this section as well. Take a few additional minutes to observe the core and describe anything else that you think is significant. Are there other visible layers? Color changes? Before you extrude your core, make sure you measure the total length of the core.

Length of entire sediment sample core: _____ (units used)

Length of top layer of sediment sample core: _____ (units used)

Length of second layer of sediment sample core: _____ (units used)

Anything else you notice about the core? (colors, layers, etc.)

TO extrude a core follow the directions on the next 2 pages. Once you push the core out of the tube use the additional sheet captioned “Snapshot Grab_Log” to complete your examination.

FOLLOW THE STEP-BY-STEP DIRECTION SHEET

SAMPLING:

1. Find an area in the water where the sediment is soft enough for you to push the clear end of the sampler straight in. You might have to try several times to find an area you can penetrate. (NOTE THE CLEAR TUBE IS STURDY BUT NOT INDESTRUCTABLE SO DON'T MUSCLE TOO HARD.)
2. Once the sampler has been pushed into the sediment, reach down in the water and close the red valve. (If the water is too deep to reach the valve, you can pull up the corer carefully and close the valve once it is within reach. The valve closing provides pressure to hold the sample in the tube – in deeper water the water pressure over the sample will do this.)
3. Once the valve is closed, gently pull straight up on the corer.
4. Keeping the sample upright bring it in to do your discussion/descriptions.

DISCUSSION: Once you have the core for group analysis use the sheet that is in your protocols to look through and analyze it with the group. Using the sheet record your findings on smell, rocks, shells etc. Discuss how these items might have ended up in the river and the role they play there.

X-Ray Fluorescence (XRF) Spectrometer– What does this mean – This piece of equipment can be used to measure lead and other metal concentrations in the sediments. There is a natural background reading of lead in the river (approx. 20ppm) but anthropogenic influences such as early 20th century industry, leaded gas etc. have caused an increase in that level. Using the XRF we can look at what the readings of various metals are in different areas of the river. This information will be generated at Lamont and the results provided back to the group. The hope is to use this information to roughly constrain the age of sediments you collect. A straightforward interpretation of this data is that low levels of lead similar to natural background would indicate sediments that are older than (deposited prior to) approximately 1900, while sediments containing lead at levels elevated above the natural background would indicate sediments that are younger or deposited after 1900.

(**Note** if the area you are coring is primarily sand the corer may not work and the sand may fall out when you lift the corer from the water. In this case if you would still like to examine the bottom of the river with your students you might be able to slide a flat piece of something under the base of the corer and still extract a sample to look at. If that isn't possible, consider using a jar to scoop out a section trying to obtain a sample that goes down 3-4 inches. The same activities can be completed with this type of sample. When you bag your sample please note it was not obtained with the corer.)

Snapshot Day Recording Sheet VIII - Chemical Measurements

1. **Ph**

Ph has no units listed with it. Neutral Range is 7

A measure of the acidity of an area. Repeat several times in succession and average the results.

Time	Reading 1	Reading 2	Reading 3	Average
_____	_____	_____	_____	_____

How was it determined? (check one)

litmus paper ___ indicator solution ___ meter ___ pH pen ___ other ___

2. **Salinity**

Most studies measure the concentration of chloride (Cl^-) to determine salinity, however different instruments measure salinity as 'total salts', 'chloride' or even conductivity. Therefore it is essential that you mark down what instrument you used to measure the salinity. In freshwater parts of the river, the units of measurement may be parts per million (ppm) or milligrams per liter (mg/l), which are equivalent.

One ppm is like:

- one second in 11.5 days,
- one minute in two years,
- one cent in \$10,000 or

In saltier parts of the river, you may also see measurements expressed in parts per thousand (ppt); one part per thousand equals 1000 mg/l. Background level of Cl^- in the freshwater part of the estuary is typically 20 - 30 mg/l (.020 - .030 ppt). In the seawater of the open Atlantic Ocean, Cl^- concentration is roughly 35,000 mg/l (35 ppt).

Repeat several times in succession and average the results. Specify the units of measurement.

Time	Reading 1	Reading 2	Reading 3	Average	Units
_____	_____	_____	_____	_____	_____

How was it determined? (check one)

drop count test kit ___ meter ___ refractometer ___ test strips ___ hydrometer ___

(If reading conductivity please record with appropriate unit uS/cm (microsiemens) or mS/cm (milliseimens and then convert to salinity)

3. **Dissolved oxygen.**

The amount of dissolved oxygen (DO) in a river is one of the most important factors determining its health. Many variables influence DO, including temperature, time of day, presence of plants, and wind conditions. DO measurements are given in mg/l and as percent saturation. At 100% saturation, water of a given temperature cannot hold more DO. If more is added - by wind or turbulence, saturation may temporarily exceed 100%, but in this case oxygen will diffuse from the water into the air. Saturation levels below 100% are not necessarily the result of pollution. At night, when plants aren't producing oxygen through photosynthesis, saturation may fall below 100% as living things use up the available DO.

time temperature in °C DO (mg/l) % saturation

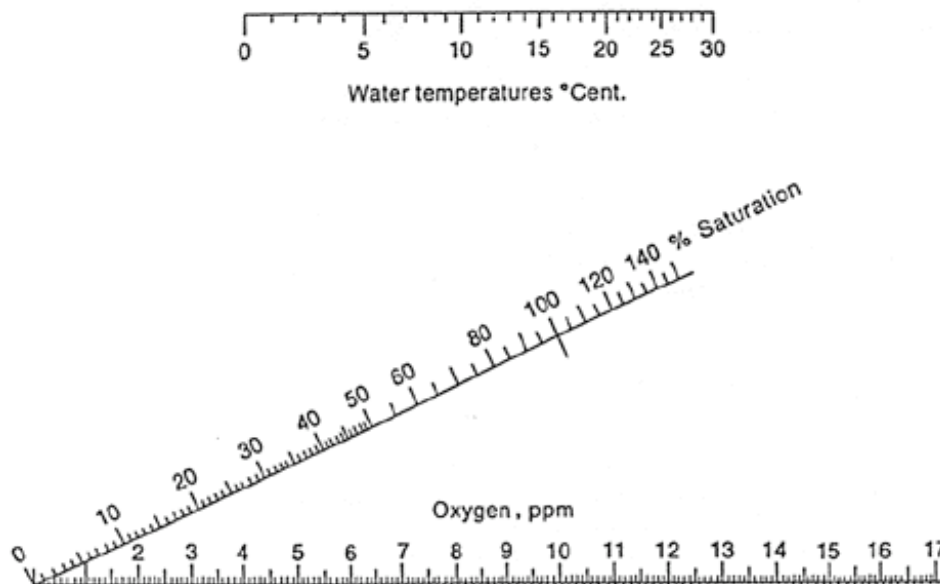
How was it determined? (check one)

Drop count test kits ___ ampules ___ digital titrator ___ meter ___ other ___

DETERMINING PERCENT SATURATION THE "QUICK AND EASY" METHOD

Source of chart: <http://waterontheweb.org/under/waterquality/oxygen.html>

For a quick and easy determination of the percent saturation value for dissolved oxygen at a given temperature, use the saturation chart above. Pair up the mg/l of dissolved oxygen you measured and the temperature of the water in degrees C. Draw a straight line between the water temperature and the mg/l of dissolved oxygen. The percent saturation is the value where the line intercepts the saturation scale. Waterways with a saturation value of 90% or above are considered healthy.



ADDITIONAL CHEMICAL TESTS IF DESIRED

The following tests typically require more complex methods than those described above. There is no requirement to do these, but if you have the equipment and ability, the data would be welcome.

4. **Nitrates.**

Nitrate (NO_3^-) is relatively plentiful in freshwater ecosystems but less so in saltwater ecosystems, where it is typically the limiting nutrient.

Repeat several times in succession and average the results.

Time	Reading 1	Reading 2	Reading 3	Average	
_____	_____	_____	_____	_____	NO_3^- (mg/l)

5. Phosphate

Phosphate (PO_4^{-3}) is usually the nutrient least available in freshwater ecosystems.

Repeat several times in succession and average the results.

Time	Reading 1	Reading 2	Reading 3	Average	
_____	_____	_____	_____	_____	PO_4^{-3} mg/l

6. Alkalinity

Alkalinity is a measure of water's ability to neutralize acids such as those that might be found in acid precipitation. Don't confuse it with pH. pH measures how strongly acidic or alkaline the water is; the alkalinity test determines the concentration of alkaline compounds in the water – or water hardness. In pure water small amounts of acid or alkaline substances will cause dramatic shifts in pH – however with the addition of small particles of water hardness substances in the system causes a buffering that absorbs or soaks up small changes to the system.

Alkalinity results are given in mg/l of calcium carbonate (CaCO_3).

Repeat several times in succession and average the results.

Time	Reading 1	Reading 2	Reading 3	Average	
_____	_____	_____	_____	_____	CaCO_3 mg/l

Snapshot Day Activity IX - Fish & Macroinvertebrates

The data section below is set up for fish and invertebrates such as crabs and crayfish that are easily visible without magnification. This sheet can be adapted if you plan to capture and study plankton. If making repeated collections, record data for each haul and then add the catch totals together. If you have trouble identifying organisms to the species level, list them at the most specific level of classification possible. Young of the year herring - alewife, blue-back herring, and American shad - look very similar to one another, as do very young sunfish. Group them together as herring or sunfish. Measure the **largest** individual of each species. It will not be possible to tell males from females for most of what you catch, but for a few - blue crabs for instance - it is possible and very useful to distinguish gender.

So that we can compare data from site to site please list LENGTH OF SEINE NET, LENGTH OF SEINE PULL and TOTAL NUMBER OF fish caught PER SEINE. If you site used traps please note catches per trap. If your group would like to compute Catch Per Unit of Effort please see directions on back.

Length of seine net _____ Length of seine pull _____ Total number of fish in pull _____

Total number of seines or catches you ran during your study period _____

Type of equipment used:

seine (list dimensions & mesh size) _____

eel pot ___ minnow trap ___ dip net ___ plankton net ___ other: _____

FISH SPECIES CAUGHT

Use separate sheet for each seine OR note what was caught in each seine by noting seine #.

Fish Species:	# of individuals:	TIME _____
		Size of largest (unit)
1. _____	_____	_____
2. _____	_____	_____
3. _____	_____	_____
4. _____	_____	_____
5. _____	_____	_____
6. _____	_____	_____
7. _____	_____	_____
8. _____	_____	_____
9. _____	_____	_____
10. _____	_____	_____
11. _____	_____	_____
12. _____	_____	_____

Macroinvertebrates:

1. _____
2. _____
3. _____
4. _____
5. _____

To Compute Catch Per Unit Equivalent (CPUE) – Let’s use a 50 ft. net for the example. Take length of net (50 ft.) X length of pull (example 7 yards X 3 = 21 ft.) then convert it to meters - 50 ft. X 21ft X 12 (for inches per foot) = total inches. Divide by 39.37 inches for inches in a meter = 320 meters. Then divide your catch by 320 to get catch per meter seined. This figure should be computed for each seine event.

If you pull the net in just to close a circle the formula is: Net Length (ft.) ___ X 12 = total inches / 39.37 (inches in a meter) = ____ Then divide your catch by this number for your CPUE.

Seine # _____ Time _____ Catch Total _____ Length of Pull _____ computed
 CPUE _____
 Seine # _____ Time _____ Catch Total _____ Length of Pull _____ computed
 CPUE _____
 Seine # _____ Time _____ Catch Total _____ Length of Pull _____ computed
 CPUE _____

Hudson River Fish Fauna Check List

- | | | | | | |
|----|-------|----------------------------------|-----|-------|--|
| 1 | _____ | lamprey, silver | 58 | _____ | rudd |
| 2 | _____ | lamprey, American brook (ñ) | 59 | _____ | chub, creek (ñ) |
| 3 | _____ | lamprey, sea (ñ) | 60 | _____ | fallfish (ñ) |
| 4 | _____ | shark (<i>bull shark?</i>) (ñ) | 61 | _____ | sucker, longnose (ñ) |
| 5 | _____ | dogfish, smooth (ñ) | 62 | _____ | sucker, white (ñ) |
| 6 | _____ | dogfish, spiny (ñ) | 63 | _____ | chubsucker, creek (ñ) |
| 7 | _____ | skate, little (ñ) | 64 | _____ | hog sucker, northern (ñ) |
| 8 | _____ | skate, barndoor (ñ) | 65 | _____ | buffalo hybrid (black x smallmouth) |
| 9 | _____ | sturgeon, shortnose (ñ) | 66 | _____ | redhorse, shorthead |
| 10 | _____ | sturgeon, Atlantic (ñ) | 67 | _____ | weatherfish, Oriental |
| 11 | _____ | gar, longnose | 68 | _____ | pirapitinga (Characin) |
| 12 | _____ | bowfin | 69 | _____ | catfish, white (ñ) |
| 13 | _____ | ladyfish (ñ) | 70 | _____ | bullhead, yellow (ñ) |
| 14 | _____ | bonefish (ñ) | 71 | _____ | bullhead, brown (ñ) |
| 15 | _____ | eel, American (ñ) | 72 | _____ | catfish, channel |
| 16 | _____ | worm eel, speckled (ñ) | 73 | _____ | stonecat |
| 17 | _____ | eel, conger (ñ) | 74 | _____ | madtom, tadpole (ñ) |
| 18 | _____ | herring, blueback (ñ) | 75 | _____ | madtom, margined (ñ) |
| 19 | _____ | shad, hickory (ñ) | 76 | _____ | madtom, brindled |
| 20 | _____ | alewife (ñ) | 77 | _____ | pickerel, redfin (ñ) |
| 21 | _____ | shad, American (ñ) | 78 | _____ | pike, northern (ñ) |
| 22 | _____ | menhaden, Atlantic (ñ) | | | muskellunge, tiger (<i>norlunge</i>) |
| 23 | _____ | herring, Atlantic (ñ) | 79 | _____ | pickerel, chain (ñ) |
| 24 | _____ | shad, gizzard | 80 | _____ | mudminnow, central |
| 25 | _____ | herring, round (ñ) | 81 | _____ | mudminnow, eastern (ñ) |
| 26 | _____ | anchovy, striped (ñ) | | | mudminnow (hybrid) (ñ) |
| 27 | _____ | anchovy, bay (ñ) | 82 | _____ | smelt, rainbow (ñ) |
| 28 | _____ | stoneroller, central | 83 | _____ | herring, lake (<i>cisco</i>) (ñ) |
| 29 | _____ | goldfish | 84 | _____ | whitefish, lake (ñ) |
| 30 | _____ | dace, redbelly | 85 | _____ | trout, rainbow |
| 31 | _____ | chub, lake (ñ) | 86 | _____ | kokanee (<i>sockeye</i>) |
| 32 | _____ | carp, grass | 87 | _____ | salmon, chinook |
| 33 | _____ | shiner, satinfin (ñ) | 88 | _____ | whitefish, round (ñ) |
| 34 | _____ | shiner, spotfin | 89 | _____ | salmon, Atlantic (ñ) |
| 35 | _____ | carp, common | 90 | _____ | trout, brown |
| | | carp, mirror (<i>var.</i>) | 91 | _____ | trout, brook (ñ) |
| 36 | _____ | minnow, cutlips (ñ) | 92 | _____ | trout, lake (ñ) |
| 37 | _____ | minnow, brassy (ñ) | 93 | _____ | lizardfish, inshore (ñ) |
| 38 | _____ | minnow, eastern silvery (ñ) | 94 | _____ | trout-perch (ñ) |
| 39 | _____ | shiner, bridle (ñ) | 95 | _____ | rockling, fourbeard (ñ) |
| 40 | _____ | shiner, common (ñ) | 96 | _____ | cod, Atlantic (ñ) |
| 41 | _____ | dace, pearl (ñ) | 97 | _____ | hake, silver (<i>whiting</i>) (ñ) |
| 42 | _____ | chub, hornyhead | 98 | _____ | tomcod, Atlantic (ñ) |
| 43 | _____ | shiner, golden (ñ) | 99 | _____ | pollock (ñ) |
| 44 | _____ | shiner, comely (ñ) | 100 | _____ | hake, red (<i>ling</i>) (ñ) |
| 45 | _____ | shiner, emerald | 101 | _____ | hake, spotted (ñ) |
| 46 | _____ | shiner, blackchin | 102 | _____ | hake, white (ñ) |
| 47 | _____ | shiner, blacknose | 103 | _____ | cusck-eel, striped (ñ) |
| 48 | _____ | shiner, spottail (ñ) | 104 | _____ | toadfish, oyster (ñ) |
| 49 | _____ | shiner, sand | 105 | _____ | goosefish (<i>anglerfish</i>) (ñ) |
| 50 | _____ | shiner, rosyface | 106 | _____ | needlefish, Atlantic (ñ) |
| 51 | _____ | dace, northern redbelly (ñ) | 107 | _____ | houndfish (ñ) |
| 52 | _____ | dace, finescale (ñ) | 108 | _____ | minnow, sheepshead |
| 53 | _____ | minnow, bluntnose | 109 | _____ | killifish, eastern banded (ñ) |
| 54 | _____ | minnow, fathead | 110 | _____ | mummichog (ñ) |
| 55 | _____ | dace, eastern blacknose (ñ) | 111 | _____ | killifish, striped (ñ) |
| 56 | _____ | dace, longnose (ñ) | 112 | _____ | killifish, spotfin (ñ) |
| 57 | _____ | bitterling | 113 | _____ | mosquitofish, western |

- 114 _____ silverside, brook
 115 _____ silverside, rough (ñ)
 116 _____ silverside, inland (ñ)
 117 _____ silverside, Atlantic (ñ)
 118 _____ stickleback, fourspine (ñ)
 119 _____ stickleback, brook (ñ)
 120 _____ stickleback, threespine (ñ)
 121 _____ stickleback, ninespine (ñ)
 122 _____ cornetfish, bluespotted (ñ)
 123 _____ seahorse, lined (ñ)
 124 _____ pipefish, northern (ñ)
 125 _____ gurnard, flying (ñ)
 126 _____ sea robin, northern (ñ)
 127 _____ sea robin, striped (ñ)
 128 _____ sculpin, slimy (ñ)
 129 _____ sea raven (ñ)
 130 _____ grubby (ñ)
 131 _____ sculpin, longhorn (ñ)
 132 _____ lumpfish (ñ)
 133 _____ seasnail, Atlantic (ñ)
 134 _____ perch, white (ñ)
 135 _____ bass, white
 136 _____ bass, striped (ñ)
 137 _____ sea bass, black (ñ)
 138 _____ gag (*grouper*) (ñ)
 139 _____ bass, rock
 140 _____ sunfish, bluespotted (ñ)
 141 _____ sunfish, banded (ñ)
 142 _____ sunfish, redbreast (ñ)
 143 _____ sunfish, green
 144 _____ pumpkinseed (ñ)
 145 _____ warmouth
 146 _____ bluegill
 147 _____ bass, smallmouth
 148 _____ bass, largemouth
 149 _____ crappie, white
 150 _____ crappie, black
 151 _____ darter, greenside
 152 _____ darter, fantail
 153 _____ darter, tessellated
 154 _____ perch, yellow (ñ)
 155 _____ logperch
 156 _____ darter, shield
 157 _____ walleye
 158 _____ bigeye, short (ñ)
 159 _____ bluefish (ñ)
 160 _____ cobia (ñ)
 161 _____ sharksucker (ñ)
 162 _____ jack, crevalle (ñ)
 163 _____ scad, round (ñ)
 164 _____ moonfish, Atlantic (ñ)
 165 _____ lookdown (ñ)
 166 _____ permit (ñ)
 167 _____ schoolmaster (ñ)
 168 _____ snapper, gray (*mangrove*) (ñ)
 169 _____ mojarra, spotfin (ñ)
 170 _____ pigfish (ñ)
 171 _____ sheepshead (ñ)
 172 _____ pinfish (ñ)
 173 _____ scup (*porgy*) (ñ)
 174 _____ drum, freshwater (*sheepshead*)
 175 _____ perch, silver (ñ)
 176 _____ weakfish (ñ)
 177 _____ spot (*Lafayette*) (ñ)
 178 _____ kingfish, northern (ñ)
 179 _____ croaker, Atlantic (ñ)
 180 _____ butterflyfish, foureye (ñ)
 181 _____ butterflyfish, spotfin (ñ)
 182 _____ mullet, striped (ñ)
 183 _____ mullet, white (ñ)
 184 _____ sennet, northern (ñ)
 185 _____ guaguanche (ñ)
 186 _____ tautog (*blackfish*) (ñ)
 187 _____ cunner (*bergall, chogy*) (ñ)
 188 _____ gunnel, rock (ñ)
 189 _____ stargazer, northern (ñ)
 190 _____ blenny, feather (ñ)
 191 _____ blenny, freckled (ñ)
 192 _____ sand lance, American (*sand eel*) (ñ)
 193 _____ sleeper, fat (ñ)
 194 _____ goby, naked (ñ)
 195 _____ goby, seaboard (ñ)
 196 _____ goby, seaboard (ñ)
 197 _____ goby, highfin (ñ)
 198 _____ mackerel, Atlantic (ñ)
 199 _____ mackerel, Spanish (ñ)
 200 _____ butterfish (ñ)
 201 _____ snakehead, northern (ñ)
 202 _____ flounder, Gulf Stream (ñ)
 203 _____ flounder, smallmouth (ñ)
 204 _____ flounder, summer (*fluke*) (ñ)
 205 _____ flounder, fourspot (ñ)
 206 _____ windowpane (ñ)
 207 _____ flounder, winter (ñ)
 208 _____ flounder, yellowtail (ñ)
 209 _____ tonguefish, northern (ñ)
 210 _____ hogchoker (ñ)
 211 _____ filefish, orange (ñ)
 212 _____ filefish, planehead (ñ)
 213 _____ burrfish, striped (ñ)
 214 _____ puffer, smooth (ñ)
 215 _____ puffer, northern (ñ)
 216 _____ cowfish, scrawled (ñ)
- (ñ) = Native Species (~77%)
 Taxonomic diversity:
 Class 4
 Order 26
 Families 75
 Genera 154
 Species 216
- Tom Lake NYSDEC Hudson River Estuary Naturalist May

Snapshot Day Activity X- Other Observations

1. Shipping.

Should you see large ships, tugs, or barges pass your site, note the following information if possible. A loaded ship or barge is full of cargo, and rides lower in the water than a light - empty - vessel. Binoculars are helpful in gathering the information requested here.

Time	Type of ship	Name	Northbound Southbound/	light loaded/	cargo
<hr/>					
<hr/>					
<hr/>					
<hr/>					

2. Other items of interest.

Feel free to record any other observations. This could include birds seen, items found on the beach, or any other things you find interesting

Snapshot Day Activity XI- Journaling & A Hudson River Almanac Entry

How do we learn about our natural environment? We **observe**.

Through this activity we are focusing on developing skills of observation that play such an important role in science and Earth systems. Direct observation and careful description helps us compare species, habitats and different geographical regions. Through journaling we hope to observe, record and better understand some of the relationships that exist in the natural world.

Students have a sheet for recording observations during the day. In addition to their personal observations, at the end of the day the space below can be used for drafting a Hudson River Almanac entry from each site, which will be submitted with your data (use additional paper as needed, but keep them to 4-6 sentences please). Sample entry:

September 29 - Dobbs Ferry - Our beach seine was filled with nearly 600 fish-snapper blues, white perch, a vast school of silverside, and several 4"-7" striped bass. Low flying monarchs passed in twos and threes, dipping within inches, brushing against us as they beat into strong southerlies. The students from Irvington were thrilled to be so close to so much loveliness. As they passed, the students called out the tally; they were moving past us at the rate of fifty an hour. Christopher Letts

Hudson River Almanac Entry: