

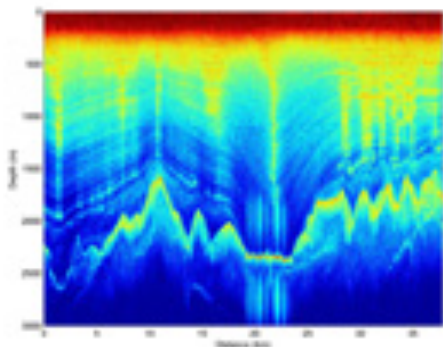
Activity 3

STUDENT RESPONSE PAGE

NAME _____

LOCATE THE LAKES

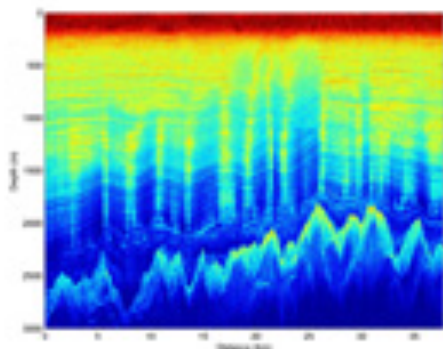
DATA IMAGE 1



A) CIRCLE ANY SUBGLACIAL LAKE(S) YOU SEE IN THE IMAGE.

B) IF YOU CIRCLE A LAKE LIST THE REASONS YOU SELECTED IT.

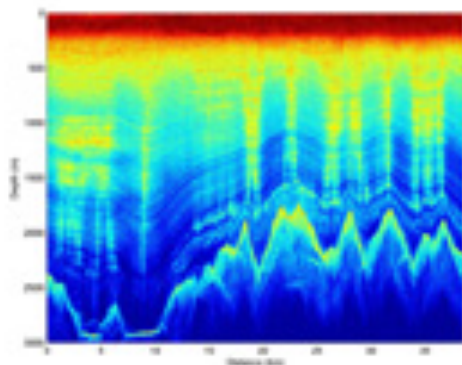
DATA IMAGE 2



A) CIRCLE ANY SUBGLACIAL LAKE(S) YOU SEE IN THE IMAGE.

B) IF YOU CIRCLE A LAKE LIST THE REASONS YOU SELECTED IT.

DATA IMAGE 3



A) CIRCLE ANY SUBGLACIAL LAKE(S) YOU SEE IN THE IMAGE.

B) IF YOU CIRCLE A LAKE LIST THE REASONS YOU SELECTED IT.
